

Name:

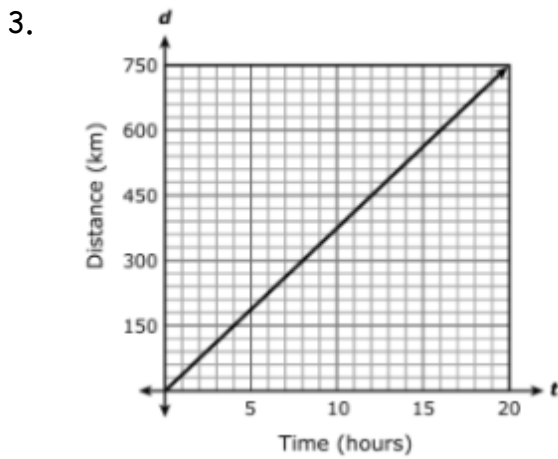
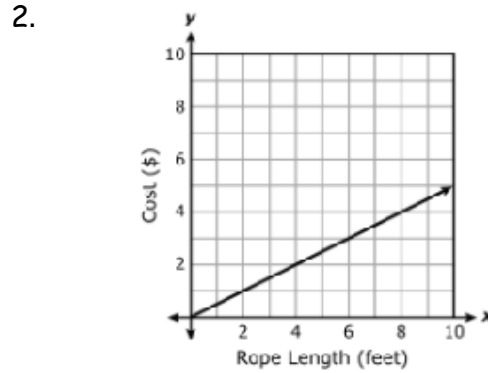
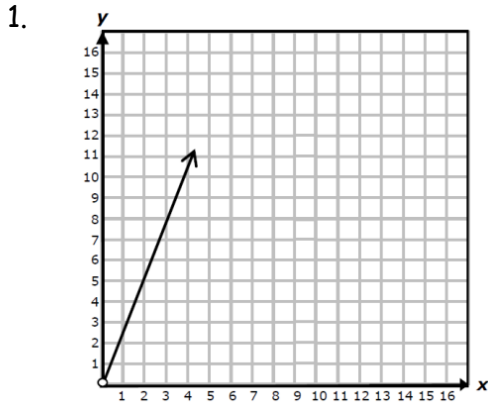
Period:

Date:



Homework 7.4a - Unit Rate
Must SHOW Your Work!!!

Directions: Find the Rate of change for each



4.

x	80	64	40	16
y	10	8	5	2

5.

Sending Video Messages	
Number of Messages	Cost (\$)
x	y
5	1.25
7	1.75
12	3.00
15	3.75